

Name _____

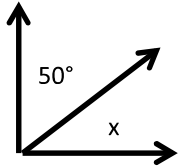
Date _____

4.MD.7

Measurement and Data

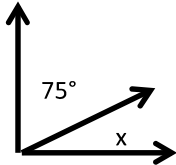
My Score _____

1. What is the value of angle X?



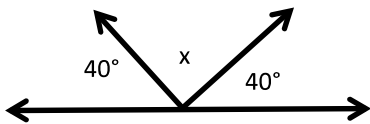
X= _____

2.



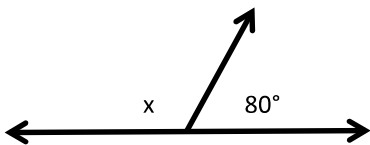
X= _____

3.



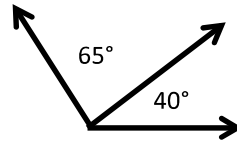
X= _____

4.

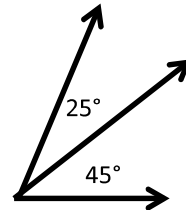


X= _____

5. What is the sum of both angles?



6. What is the sum of both angles?



7. What is the sum of the angles?

