

Name \_\_\_\_\_


# Practice Sheet

**4.G.2**  
Classify  
quadrilaterals

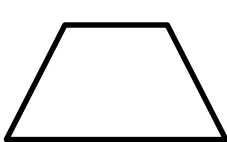
## More Practice: Classify Quadrilaterals

Classify each figure below in as many ways as possible.

Use the terms: quadrilateral, trapezoid, parallelogram, rhombus, rectangle, and/or square. Put a star next to the figure's most specific name.

Ex: 

quadrilateral  
parallelogram  
★ rhombus

1. 


\_\_\_\_\_

\_\_\_\_\_

\_\_\_\_\_

\_\_\_\_\_

\_\_\_\_\_

2. 


\_\_\_\_\_

\_\_\_\_\_

\_\_\_\_\_

\_\_\_\_\_

\_\_\_\_\_

3. 

\_\_\_\_\_

\_\_\_\_\_

\_\_\_\_\_

\_\_\_\_\_


\_\_\_\_\_

Match the term with the correct description.

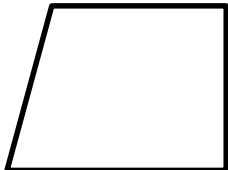
- |                      |  |
|----------------------|--|
| ___ 4. rhombus       | A. right angles; opposite sides are equal and parallel |
| ___ 5. rectangle     | B. only one pair of parallel lines                     |
| ___ 6. parallelogram | C. right angles; all sides are equal                   |
| ___ 7. square        | D. opposite sides are parallel; all sides are equal    |
| ___ 8. trapezoid     | E. opposite sides are equal and parallel               |

Identify each quadrilateral using the most specific term possible.


9. \_\_\_\_\_



10. \_\_\_\_\_



11. \_\_\_\_\_



12. \_\_\_\_\_

